

Please check the examination details below before entering your candidate information

Candidate surname

Other names

**Pearson Edexcel
International GCSE**

Centre Number

--	--	--	--	--

Candidate Number

--	--	--	--	--

Friday 17 May 2019

Morning (Time: 1 hour 30 minutes)

Paper Reference **4BN1/02**

Bangladesh Studies

**Paper 2: The landscape, people and economy of
Bangladesh**

You do not need any other materials.

Total Marks

Instructions

- Use **black** ink or ball-point pen.
- **Fill in the boxes** at the top of this page with your name, centre number and candidate number.
- Answer **all** questions.
- Answer the questions in the spaces provided
– *there may be more space than you need.*

Information

- The total mark for this paper is 75.
- The marks for **each** question are shown in brackets
– *use this as a guide as to how much time to spend on each question.*

Advice

- Read each question carefully before you start to answer it.
- Try to answer every question.
- Check your answers if you have time at the end.

Turn over ►

P58998A

©2019 Pearson Education Ltd.

1/1/1



Pearson

Answer ALL questions

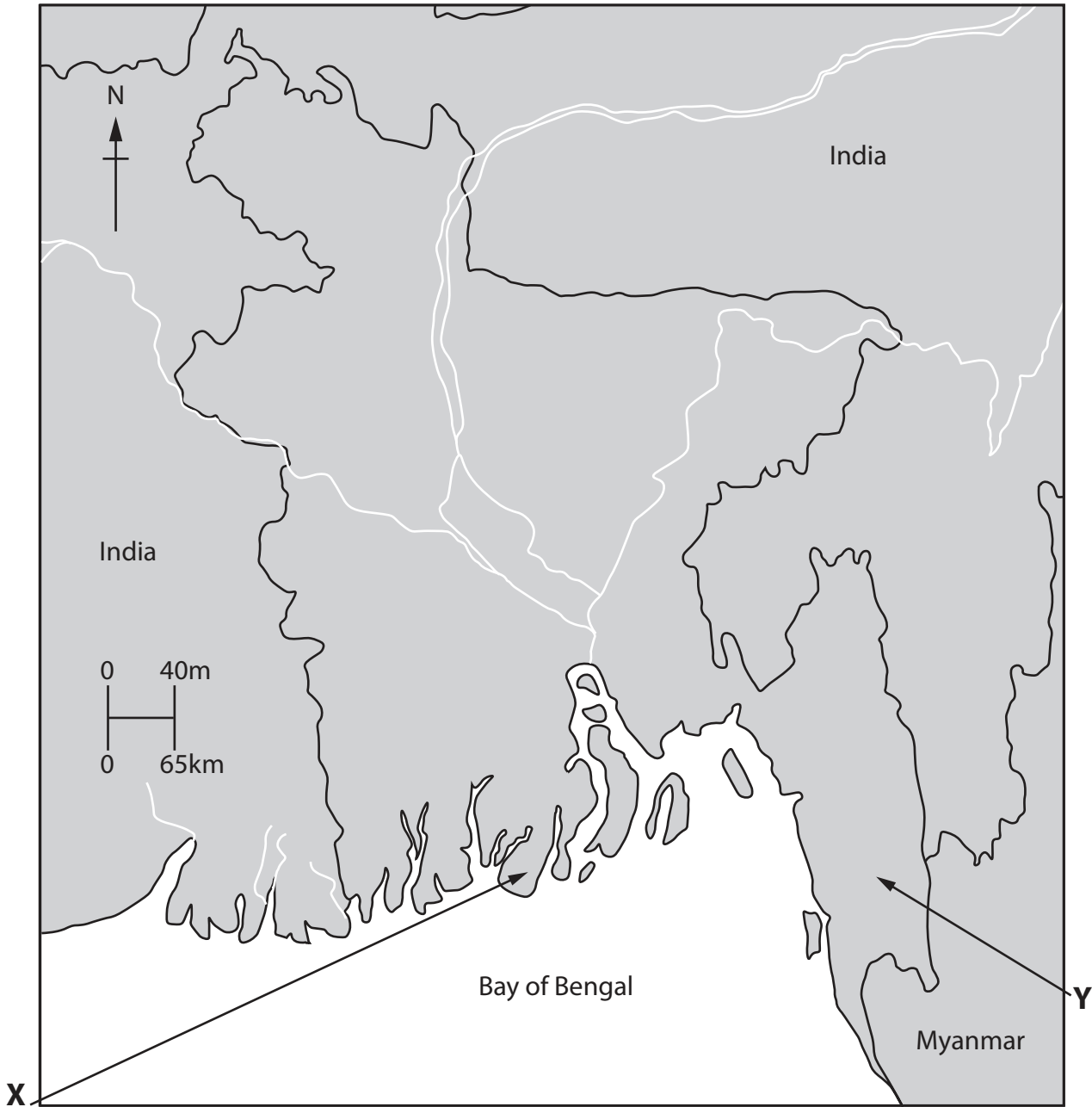
SECTION A: The Physical Environment

Some questions must be answered with a cross in a box ☒. If you change your mind about an answer, put a line through the box ☒ and then mark your new answer with a cross ☒.

Write your answers in the spaces provided.

You should aim to spend no more than 30 minutes on this section.

- 1 (a) Study Figure 1 which shows a map of Bangladesh.



(Source: from www.international.gc.ca/cil-cai/assets/images/cil-cai/images/maps-cartes/eng/bd.gif)

Figure 1

DO NOT WRITE IN THIS AREA

DO NOT WRITE IN THIS AREA

DO NOT WRITE IN THIS AREA



(i) Identify which ecosystem can be found at **X** on the map.

(1)

<input type="checkbox"/>	A mangrove
<input type="checkbox"/>	B deciduous forest
<input type="checkbox"/>	C desert
<input type="checkbox"/>	D tropical forest

(ii) State **one** characteristic of the ecosystem at **Y**.

(1)

(b) State **two** characteristics of the southwest monsoon.

(2)

1

2

(c) Explain **one** reason for the formation of the Himalayan mountains.

(3)

.....

.....

.....

.....

.....

.....

DO NOT WRITE IN THIS AREA

DO NOT WRITE IN THIS AREA

DO NOT WRITE IN THIS AREA



(d) Study Figure 2 which shows a storm surge.



(Source: © ZUMA Press, Inc. / Alamy Stock Photo)

Figure 2

Suggest **two** reasons why Bangladesh’s coastline is frequently damaged by storm surges.

(4)

1

.....

.....

.....

.....

2

.....

.....

.....

.....



DO NOT WRITE IN THIS AREA

DO NOT WRITE IN THIS AREA

DO NOT WRITE IN THIS AREA

(e) Explain why **one** named natural resource is being exploited in Bangladesh.

(6)

Named natural resource

.....

.....

.....

.....

.....

.....

.....

.....

.....

.....

.....

.....

.....

.....

.....

.....

.....

.....

.....

.....

.....

.....

.....

.....



(f) Assess the measures implemented by Bangladesh's government to reduce the impacts of river flooding.

(8)

Area with horizontal dotted lines for writing the answer.

(Total for Question 1 = 25 marks)

TOTAL FOR SECTION A = 25 MARKS

DO NOT WRITE IN THIS AREA

DO NOT WRITE IN THIS AREA

DO NOT WRITE IN THIS AREA



SECTION B: The Human Environment

You should aim to spend no more than 30 minutes on this section.

- 2 (a) Study Figure 3 which shows the value of Bangladesh's exports of consumer goods and textiles in US dollars (US\$) in 1995, 2005 and 2015.

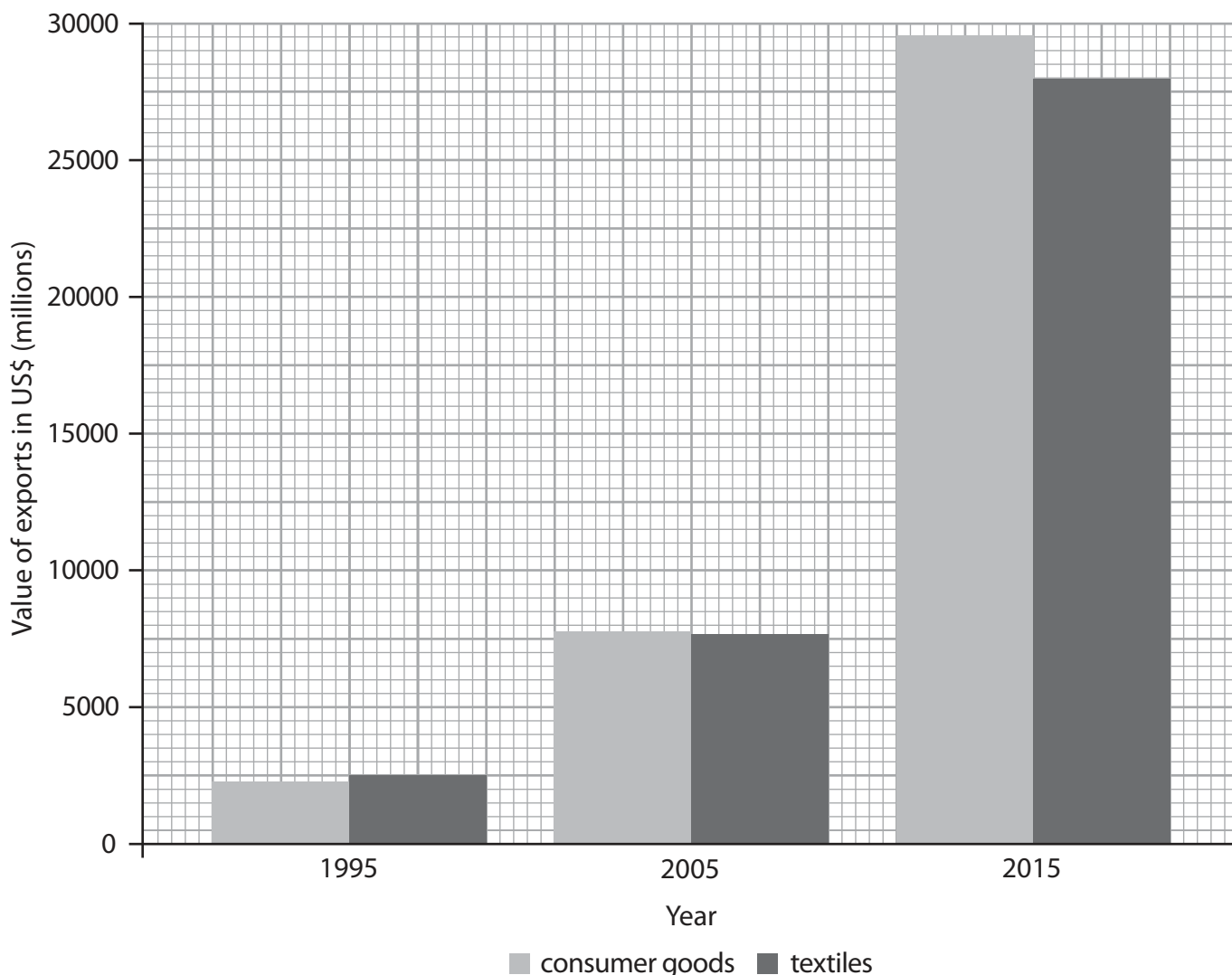


Figure 3

- (i) Identify the value in US\$ of textile exports in 2005.

(1)

<input type="checkbox"/>	A 3,700 million
<input type="checkbox"/>	B 5,700 million
<input type="checkbox"/>	C 7,700 million
<input type="checkbox"/>	D 9,700 million



(ii) Calculate the difference in the value of consumer goods exports between 1995 and 2015.

(1)

..... US\$ million

(b) State **two** challenges for Bangladesh's transport system.

(2)

1

2

(c) Explain **one** impact of Bangladesh's reliance on imported energy.

(3)

.....

.....

.....

.....

.....

.....

DO NOT WRITE IN THIS AREA

DO NOT WRITE IN THIS AREA

DO NOT WRITE IN THIS AREA



(d) Study Figure 4 which shows rice farming in Bangladesh.



Figure 4

(Source: © SM Rafiq Photography./Getty images)

Suggest **two** factors that influence the distribution of rice farming in Bangladesh.

(4)

1

.....

.....

.....

2

.....

.....

.....



(e) Explain the strategies used to increase agricultural output in Bangladesh.

(6)

DO NOT WRITE IN THIS AREA

DO NOT WRITE IN THIS AREA

DO NOT WRITE IN THIS AREA



(f) Evaluate the impact of globalisation on Bangladesh's economic development.

(8)

DO NOT WRITE IN THIS AREA

DO NOT WRITE IN THIS AREA

DO NOT WRITE IN THIS AREA

(Total for Question 2 = 25 marks)

TOTAL FOR SECTION B = 25 MARKS



P 5 8 9 9 8 A 0 1 1 1 6

SECTION C: Challenges for Bangladesh

Write your answers in the spaces provided.

You should aim to spend no more than 30 minutes on this section.

- 3 (a) Study Figure 5 which shows life expectancy in Bangladesh 1995-2015.

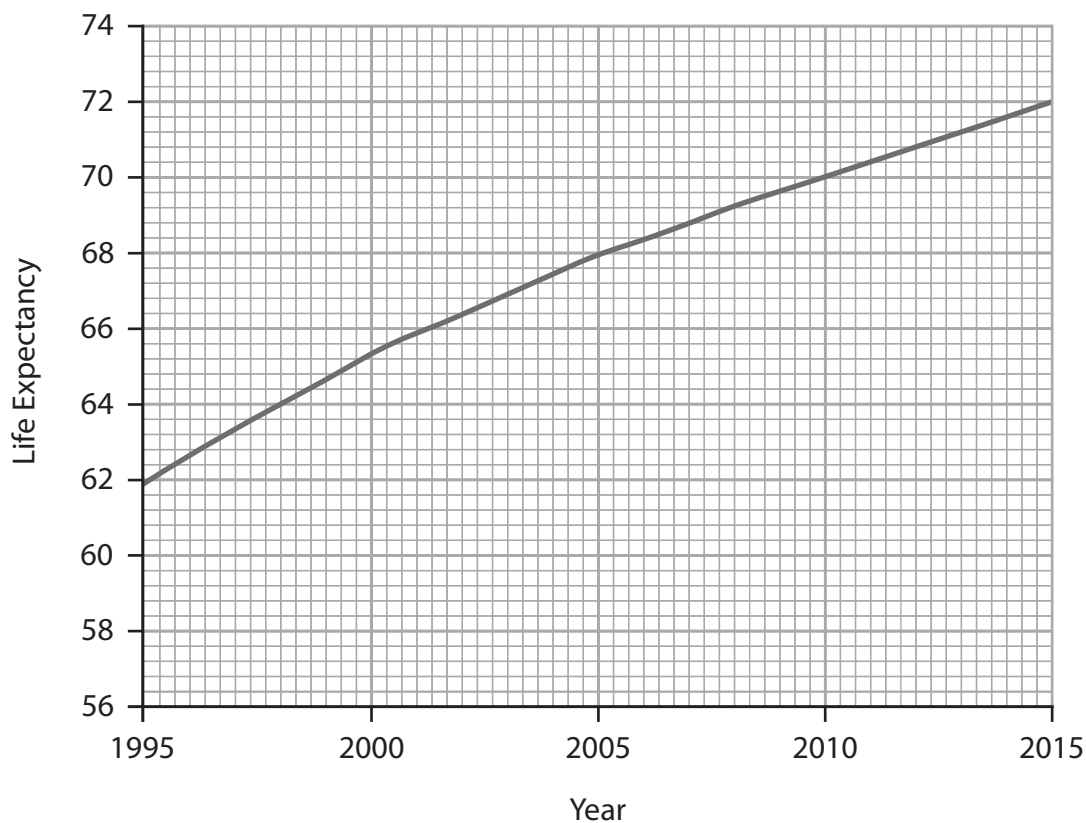


Figure 5

- (i) Identify life expectancy in Bangladesh in 2005.

(1)

<input type="checkbox"/>	A 66
<input type="checkbox"/>	B 68
<input type="checkbox"/>	C 70
<input type="checkbox"/>	D 72

- (ii) Name **one** factor that causes the rise in life expectancy.

(1)

DO NOT WRITE IN THIS AREA

DO NOT WRITE IN THIS AREA

DO NOT WRITE IN THIS AREA



(iii) State **two** 'quality of life' measures, other than life expectancy, that contribute to the Human Development Index (HDI).

(2)

1

.....

2

.....

(b) Explain **one** challenge that affects Bangladesh's rural population.

(3)

.....

.....

.....

.....

.....

.....

DO NOT WRITE IN THIS AREA

DO NOT WRITE IN THIS AREA

DO NOT WRITE IN THIS AREA



P 5 8 9 9 8 A 0 1 3 1 6

(c) Study Figure 6 which shows a residential area in Dhaka.



Figure 6

(Source: © docu bangla/Alamy Stock Photo)

Suggest **two** factors that influence the population distribution of Bangladesh.

(4)

1

.....

.....

.....

2

.....

.....

.....

DO NOT WRITE IN THIS AREA

DO NOT WRITE IN THIS AREA

DO NOT WRITE IN THIS AREA



(d) Explain how climate change may impact on the environment of Bangladesh.

(6)

DO NOT WRITE IN THIS AREA

DO NOT WRITE IN THIS AREA

DO NOT WRITE IN THIS AREA

Area with horizontal dotted lines for writing the answer.



P 5 8 9 9 8 A 0 1 5 1 6

(e) Assess how effective government strategies have been in responding to the challenges of living in large urban areas such as Dhaka.

(8)

Area with horizontal dotted lines for writing the answer to question (e).

(Total for Question 3 = 25 marks)

**TOTAL FOR SECTION C = 25 MARKS
TOTAL FOR PAPER = 75 MARKS**

DO NOT WRITE IN THIS AREA

DO NOT WRITE IN THIS AREA

DO NOT WRITE IN THIS AREA

